

HOLY HEARTS EDUCATIONAL ACADEMY
CIVIL LINES, RAIPUR (CHHATTISGARH)
HOLIDAY HOMEWORK
CLASS-II, SESSION 21-22

ENGLISH -1.) Read Ch-1 Home Sweet Home(poem)

Ch-5 Wolf ! Wolf!

- 2.) Learn question-answers of above lessons and complete the work in your fair copy.
- 3.) Draw a house using different shapes and write 5 lines about 'My Home'.

EVS - 1.) Read Chapter 1 Our Amazing body

Chapter 2 Growing with time

Complete the question/answers in your fair copy.

- 2.) Diagram (Any one)
 - a.) Draw five sense organs and write their functions. (in A-4 size paper)
 - b.) Draw the life cycle of a plant. (in A-4 size paper)
- 3.) Project:- Draw ,cut and paste 5 things that keep you clean and healthy. (For example-Soap, toothpaste, shampoo etc) (In A4 size paper)
- 4.) Write 5 healthy habits you should follow. (in A-4 size paper)

Maths- 1.) Practise Unit-I. (In homework copy)

- 2.) Learn and write tables from 2 to 15. (2 time-In homework copy)
- 3.) Learn and write ordinal numbers 1 to 20. (2 times-In homework copy)
- 4.) Project-Draw abacus showing numbers –
 - 1.) 90
 - 2.) 72
 - 3.) 65
 - 4.) 43
 - 5.) 54(in maths fair copy)

Hindi – 1) पाठ 1-सूरज आया कविता लिखो |

2) 1 से 25 तक गिनती लिखो | (दो बार)

3) वाक्य बनाओ |

तितली, पेड़, घर, हवा, कोयल, पानी, सूरज, पक्षी, गाना, सुबह, उजाला, फूल

4) किन्हीं पांच फलों के नाम लिखकर उनके बारे में पांच-पांच वाक्य लिखो |

5) आपके दोस्त को आपका कोई प्रिय खिलौना पसंद आ जाए और वह आप से खिलौना मांगे तो आप उसे खिलौना खेलने दे देंगे या फिर उसके साथ मिलकर खेलेंगे ? सोचकर बताओ ।

6) चित्र बनाकर रंग भरो और चित्र में से संज्ञा शब्द लिखो ।



Computer - Read Ch-1 ,Computer-A Machine

Complete Book Exercise and Question/answers in fair copy.

Project:- Paste pictures of any four places where computers are used.
(In A4 size paper)

Note:- 1.) The homework is a part of internal assessment so it is mandatory to do it.

2.) Projects and assignments are part of subject enrichment.

3.) Students have to complete their fair copies and don't forget to mention the index of all the subjects , Notebook completion carries marks.

4.) Homework has to be done in 3-in-1 copy.

Note:Write only answers in homework copy.

WORKSHEET

English Grammar

I Arrange these words to form correct sentences.

- 1. goa lives peter in**
- 2. rover a called dog i have**
- 3. by bus I go school to**
- 4. payal is name my**
- 5. football playing she is**

II Put a fullstop(.) if it is a sentence. Put a question mark(?) if it is a question.

- 1. This is my school**
- 2. Do you like cookies**
- 3. There is a rainbow in the sky**
- 4. Is he playing football**
- 5. Does he draw good pictures**

III Underline the naming words in the given sentences.

- 1. Ruhi is eating an apple.**
- 2. Vivek flew a kite in the park.**
- 3. Rohit painted a picture.**
- 4. The horse ran across the street.**
- 5. Jack fixed the broken glass.**

IV. Circle the special names and Underline the common names in the sentences.

1. My cousin lives in America.
2. My dog name is Tuffy.
3. Doraemon is my favourite cartoon.
4. The name of my sister is Pooja.
5. Rohit is playing with his sister.

V. Who am I ?

1. I stitch clothes _____
2. I treat sick people _____
3. I repair shoes _____
4. I make furniture _____
5. I fly an aeroplane _____

WORKSHEET

HINDI WORK SHEET CLASS – II

1) अपठित गद्यांश -

सीमा एक दिन अपनी माँ के साथ बाज़ार गई | बाज़ार में उसने कई प्रकार के फल देखे | आम , केला, सेब, अंगूर पपीता आदि | सीमा ने कहा माँ मुझे सेब बहुत अच्छा लगता है | माँ ने सेब और केले खरीदे | माँ ने कहा - हमें रोज एक सेब खाना चाहिए | सेब हमें स्वस्थ रखता है और डाक्टर से दूर रखता है |

निम्न गद्यांश को पढ़कर प्रश्न के उत्तर लिखो |

1. बाज़ार में कौन-कौन से फल थे?
2. सीमा को कौन सा फल अच्छा लगता है?
3. हमें सेब क्यों खाना चाहिए?

वाक्य बनाओ |

1. सेब - _____
2. बाज़ार - _____
3. फल - _____

2.) संज्ञा छाँटकर लिखो।

1. कोयल काली है।
2. दूध गरम है।
3. मेरे पास पेंसिल है।
4. मैं दिल्ली गया।
5. पतंग उड़ रही है।

3.) संज्ञा शब्द से खाली स्थान भरो ।

(पुस्तक, आगरा, आम, शेर, गुलाब, गरमी)

1. राजा ने _____ खाया ।
2. मैं _____ गया।
3. सीमा _____ पढ़ती है।
4. _____ जंगल का राजा है।
5. _____ लाल है।
6. आज बहुत _____ है।

4.) निम्न संज्ञा में से नाम और वस्तुएं अलग-अलग करो।

दूध, टेबल, मीना, राम, आम, मोहन, पतंग, सीमा, रस्सी, पेंसिल, मयंक, किताब, गिलास, सूरज, घड़ी, राजा।

GK WORKSHEET

I. TICK THE CORRECT ANSWER.

1. Geeta Phogat is related to which game

- a.) Wrestling ___ b.) Football ___ c.) Badminton ___

2. The Saffron on the top of our National Flag stands for

- a.) Courage ___ b.) Peace ___ c.) Prosperity ___

3. Which bird lays the largest eggs in the world

- a.) Ostrich ___ b.) Peacock ___ c.) Swan ___

4.) Name the planet on which we live.

- a. Uranus ___ b. Mercury ___ C. Earth ___

5.) Name the current President of India.

- a. Dr. Pratibha Patil ___ b. Pranab Mukherjee ___ c. Ram Nath Kovind ___

6.) It is also called 'the ship of the desert' ?

- a.) Elephant ___ b.) Camel ___ C.) Cow ___

7. Who was the first man to step on the moon?

- a. Kalpana Chawla ___ b. Bill Gates ___ C. Neil Armstrong ___

8. In the..... season, the earth is closest to the sun.

- a. Summer ___ b. Winter ___ C. Autumn ___

9. Which city is also known as 'Pink City' ?

- a. Andhra Pradesh ___ b. Jaipur ___ C. Jharkhand ___

10. The National Aquatic Animal of India is:

- a. Ganges river dolphin ___ b. Blue Whale ___ c. Shark ___

COMPUTER PUZZLE ACTIVITY

Q1. Identify the following types of computer.



a. _____



b. _____



c. _____

COMPUTER WORKSHEET -I

Q1. Arrange the jumbled words:-

1. A L T P O P

--	--	--	--	--	--

2. D S T E K O P

--	--	--	--	--	--	--

3. P C O U M E T R

--	--	--	--	--	--	--	--

4. T L E A B T

--	--	--	--	--	--

COMPUTER WORKSHEET -II

Q.Which of these activities can we do on a computer?

Tick (✓) the picture of such activities .

1



storing records

2



Jumping

3



Typing letters

k23871009 www.fotosearch.com

JUST FOR FUN

Read the tongue twister and repeat it.

Fuzzy Wuzzy was a bear. Fuzzy Wuzzy had no hair.

Fuzzy Wuzzy wasn't fuzzy, was he?

SOCIAL ACTIVITY

Keep a bowl of water and grains for birds every morning in the courtyard or balcony of your house.

VIDEO MAKING

Make your video of about 1-2 mins helping your parents and grandparents at home.

Reading and Writing:

Weather

It is a snowy day! We can go outside. We should wear warm clothes with a hat and gloves. We can build a snowman or have a snowball fight!

Answer the questions.

1.How's the weather?

2.Where can we go?

3.What should we wear?

4.What can we do?.

Let us enjoy reading these stories:

1.Wolf and the lamb

One day, A lamb was eating sweet grass away from her flock of sheep. She didn't notice a wolf coming nearer to her. When she saw the wolf, she started pleading, "Please, don't eat me. My stomach is full of grass. You can wait a while to make my meat taste much better. The grass in my stomach will be digested quickly if you let me dance." The wolf agreed.

While the lamb was dancing, she had a new idea. She said, "I can dance faster if you take my bell and ring it so hard."

The wolf took the bell and started ringing hard. The shepherd heard the sound and ran quickly to save the lamb's life.

2.The Lion and the Cows

Once upon a time there lived four cows in the forest. Everyday they used to graze together in a particular spot. They were all friends. One day a lion saw the cows grazing together. The lion wanted to eat them so he went to catch them. When the cows saw the lion, all of them fought with him. The lion had to run away. A few days passed and the cows quarreled among themselves and started grazing separately. One by one the lion killed all of them.

APTITUDE

9





Geometrical Shapes



Solve the geometrical shapes.


Match the shapes with their names.

1. (a) A-2, B-3, C-2, D-1 (b) A-4, B-1, C-2, D-3
(c) A-3, B-2, C-4, D-1 (d) A-4, B-3, C-1, D-2

A	Circle	1	
B	Triangle	2	
C	Square	3	
D	Rectangle	4	


Count the number of squares in the following figure.

2. (a) 2 (b) 5
(c) 4 (d) 3




This figure is made up of how many circles?

3. (a) 1 (b) 3
(c) 4 (d) 2



This figure is made up of how many triangles?

4. (a) 3 (b) 1
(c) 5 (d) 7



24

Aptitude World - 2

A, C, E, ?

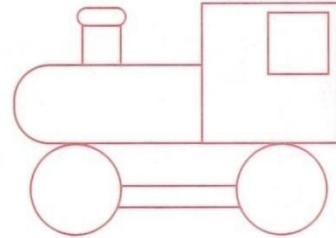
$2 \times 2 = ?$

3, 5, 7, ?

$A + B = ?$


How many circles are given in the picture?

5. (a) 3 (b) 5
(c) 2 (d) 1







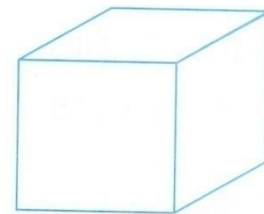
How many rectangles are given in the picture.

6. (a) 6 (b) 12
(c) 1 (d) 5



Which solid shape is used to draw the shape (x)?

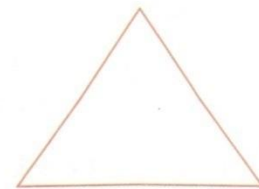
7. (a)  (b) 
(c)  (d) 



(x)

Which solid shape can be obtained by using a triangle?

8. (a)  (b) 
(c)  (d) 





Arrange the letters in a proper sequence to form a meaningful word.

Arrange the letters in a proper sequence to form a meaningful word.

REWAT 12345

1.

(a) 12345

(b) 34521

(c) 32145

(d) 54321

Arrange the letters in a proper sequence to form a meaningful word.

ACHLK

2.

(a) 23145

(b) 32541

(c) 51213

(d) 43512

Arrange the letters in a proper sequence to form a meaningful word.

DSIEL

3.

(a) 12345

(b) 34215

(c) 13245

(d) 43151

Arrange the letters in a proper sequence to form a meaningful word.

TAMRS 12345

4.

(a) 54231

(b) 53241

(c) 43152

(d) 34152

Arrange the letters in a proper sequence to form a meaningful word.

NRIEFD 123456

5.

(a) 123456

(b) 542316

(c) 523416


(d) 642135








12 Patterns





A pattern is a design or arrangement that repeats continuously.


A. Growing Pattern





1.  ?


(a)  (b)  (c)  (d) 





2.  ?

(a)  (b)  (c)  (d) 

3.  ?

(a)  (b)  (c)  (d) 

4.  ?

(a)  (b)  (c)  (d) 

30

Aptitude World - 2



A, C, E, ?

$2 \times 2 = ?$

3, 5, 7, ?

$A + B = ?$